



DAS EXAMINATION PERFORMANCE BOOSTER
END OF FIRST TERM EXAMINATION – DECEMBER, 20118

NAME:..... CLASS: 2
SUBJECT: NATURAL SCIENCE

Section A

Answer all the following questions



- Which of this is not a plant?
A. grass B. flowering plant C. goat
- Creeping plants have _____ stems.
A. branch B. Steams C. Stems
- Plants that stand straight on their own are called?
A. climbing B. erecting C. creeping
- Which of these plants have a broad leave?
A. Yam B. Cassava C. Cocoyam
- _____ is a plant.
A. Mushroom B. snail C. Amoeba
- Banana is an example of plant with-
____ leave.
A. narrow B. broad C. pointed
- is an example of plant with narrow leaves.
A. Cocoyam B. Banana C. Orange
- Animals are found all over the earth.
A. living things B. plants C. objects
- This is a _____ of a plant .
A. stem B. root
- is an insect.
A. Goat B. Fish C. Ant
- We grow sugar cane by _____
A. seed B. stem C. leaf
- Birds are the group of animals with --
A. scales B. feathers C. legs
- Some fishes have on them
A. hair B. skin C. scales
- is an example of a bird
A. Dove B. Octopus C. Bat
- is a mammal
A. Bat B. Dove C. Frog
- Human beings are also
A. insects B. mammals C. reptiles
- Which of these animals can fly?
A. birds B. reptiles C. fishes
- Mammals have on their body.
A. hair B. scales C. bones

19. We get water from _____ and _____

A. moon and sky B. sea and rain C. sun

20. Good drinking water must be _____

A. pure B. tasty C. safe

21. Water is _____

A. tasteless B. Colourful C. tasteful

22. we use air in a _____

A. Table B. tyre C. seat

23. gravel is a type of _____

A. sand B. rock C. land

24. we measure length with _____

28. we use the diagram above to measure _____ a. meat b. scale c. mass



29. Tell the time above _____ a. 12:15
b. 3:00 c. 3:12

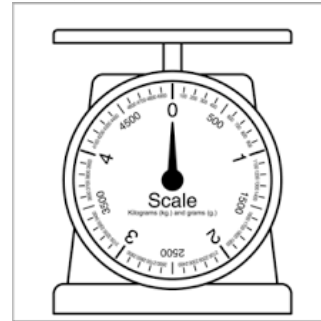
30. We measure long distances with _____ a. rule b. tape measure c. foot

A. Rule B. pencil C. foot

25. The sun give _____
A. Sunlight B. water C. air

26. Reproduction means _____
A. Producing young ones B. Weeding
C. killing

27. The diagram below is _____ a.
weighing scale b. watch c. clock



SECTION B [ANSWER ALL QUESTIONS]

1. Three types of rocks are;

a. _____

b. _____

c. _____

2. Three uses of rocks are;

a. _____

b. _____

c. _____

3. Provide the uses of water

a. _____

b. _____

c. _____

4. Write three qualities of water below

a. _____

b. _____

c. _____

5. Write the instruments for measuring;

a. Time _____

b. Volume _____

c. Mass _____

d. Length _____





6. Write the instruments for measuring'

a. Length of your book _____

b. Weight of meat _____

c. Amount of liquid _____

7. Write the names of the animals

Animals	Names
	
	
	
 <small>classroomclipart.com</small>	
