




DAS EXAMINATION PERFORMANCE BOOSTER  
END OF FIRST TERM EXAMINATION – DECEMBER 2017

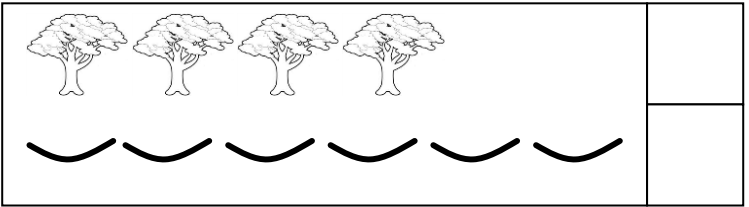
NAME:..... CLASS: 1  
SUBJECT: MATHEMATICS

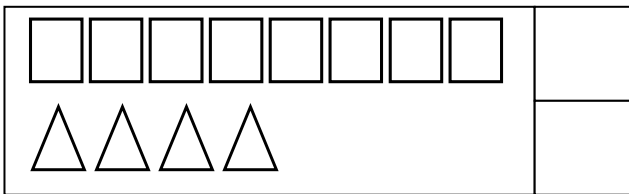
Section A


Choose the correct answer

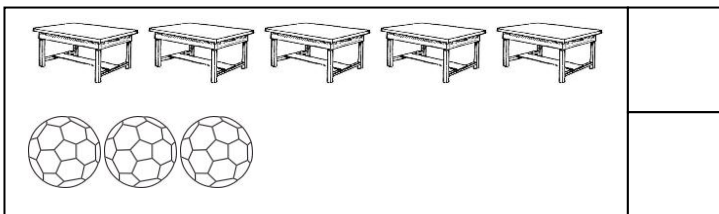
1) Tick the group that has more objects

a) 

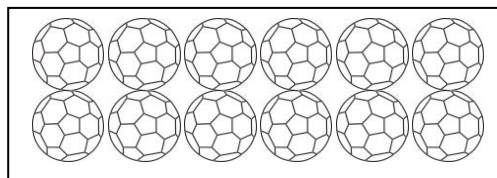
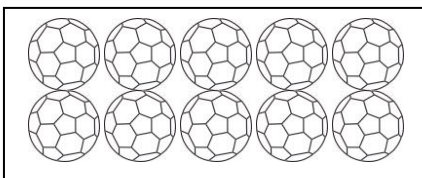
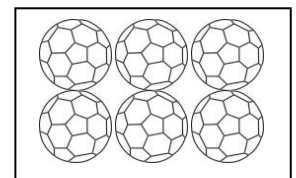
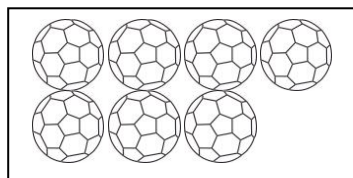
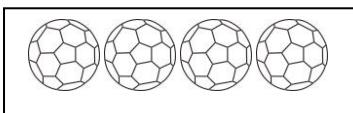
b) 

c) 

d) 

e) 

2) Write the number that represent each group





5) Write the number names

9 - \_\_\_\_\_

20 - \_\_\_\_\_

13 - \_\_\_\_\_

32 - \_\_\_\_\_

40 - \_\_\_\_\_

27 - \_\_\_\_\_


8 - \_\_\_\_\_

50 - \_\_\_\_\_


5 - \_\_\_\_\_

41 - \_\_\_\_\_

6) Putting two groups of objects together



and



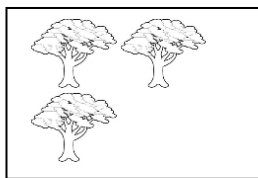
same  
as



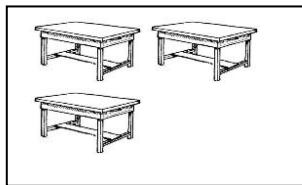
\_\_\_\_\_

\_\_\_\_\_

\_\_\_\_\_



and




same  
as



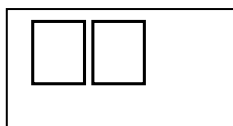
\_\_\_\_\_

\_\_\_\_\_

\_\_\_\_\_



and



same  
as



\_\_\_\_\_

\_\_\_\_\_

\_\_\_\_\_

7) Simple addition sum up to 15

a)  $4 + 7 = \square$

b)  $9 + 5 = \square$

c)  $8 + 5 = \square$

d)  $6 + 6 = \square$

e)  $10 + 2 = \square$

8) Filling the missing numbers

a)  $4 + \square = 11$

b)  $9 + \square = 12$

c)  $3 + \square = 7$

d)  $5 + \square = 9$

e)  $6 + \square = 10$

9) Write the ordinal numbers for the following

First - \_\_\_\_\_

Fourth - \_\_\_\_\_

Third - \_\_\_\_\_

Second - \_\_\_\_\_

Fifth - \_\_\_\_\_

Sixth - \_\_\_\_\_

Story problem

a) There are six girls and seven boys in my class. How many people are in my class?

---

b) Mary bought two pencils and Linda bought four pencils. How many pencils do they have altogether?

---

c) Kofi's teacher ate three mangoes and Ama's teacher ate one mango. How many mangoes did the teachers eat?

---

d) Ben has 5 crayons and Alice has 4 crayons. How many crayons do they have?

---

e) There are 10 cows in the zoo. 1 cow died, how many cows are left in the zoo?

---